

© International Baccalaureate Organization 2021

All rights reserved. No part of this product may be reproduced in any form or by any electronic or mechanical means, including information storage and retrieval systems, without the prior written permission from the IB. Additionally, the license tied with this product prohibits use of any selected files or extracts from this product. Use by third parties, including but not limited to publishers, private teachers, tutoring or study services, preparatory schools, vendors operating curriculum mapping services or teacher resource digital platforms and app developers, whether fee-covered or not, is prohibited and is a criminal offense.

More information on how to request written permission in the form of a license can be obtained from <https://ibo.org/become-an-ib-school/ib-publishing/licensing/applying-for-a-license/>.

© Organisation du Baccalauréat International 2021

Tous droits réservés. Aucune partie de ce produit ne peut être reproduite sous quelque forme ni par quelque moyen que ce soit, électronique ou mécanique, y compris des systèmes de stockage et de récupération d'informations, sans l'autorisation écrite préalable de l'IB. De plus, la licence associée à ce produit interdit toute utilisation de tout fichier ou extrait sélectionné dans ce produit. L'utilisation par des tiers, y compris, sans toutefois s'y limiter, des éditeurs, des professeurs particuliers, des services de tutorat ou d'aide aux études, des établissements de préparation à l'enseignement supérieur, des fournisseurs de services de planification des programmes d'études, des gestionnaires de plateformes pédagogiques en ligne, et des développeurs d'applications, moyennant paiement ou non, est interdite et constitue une infraction pénale.

Pour plus d'informations sur la procédure à suivre pour obtenir une autorisation écrite sous la forme d'une licence, rendez-vous à l'adresse <https://ibo.org/become-an-ib-school/ib-publishing/licensing/applying-for-a-license/>.

© Organización del Bachillerato Internacional, 2021

Todos los derechos reservados. No se podrá reproducir ninguna parte de este producto de ninguna forma ni por ningún medio electrónico o mecánico, incluidos los sistemas de almacenamiento y recuperación de información, sin la previa autorización por escrito del IB. Además, la licencia vinculada a este producto prohíbe el uso de todo archivo o fragmento seleccionado de este producto. El uso por parte de terceros —lo que incluye, a título enunciativo, editoriales, profesores particulares, servicios de apoyo académico o ayuda para el estudio, colegios preparatorios, desarrolladores de aplicaciones y entidades que presten servicios de planificación curricular u ofrezcan recursos para docentes mediante plataformas digitales—, ya sea incluido en tasas o no, está prohibido y constituye un delito.

En este enlace encontrará más información sobre cómo solicitar una autorización por escrito en forma de licencia: <https://ibo.org/become-an-ib-school/ib-publishing/licensing/applying-for-a-license/>.

Chemistry
Standard level
Paper 1

Wednesday 10 November 2021 (afternoon)

45 minutes

Instructions to candidates

- Do not open this examination paper until instructed to do so.
- Answer all the questions.
- For each question, choose the answer you consider to be the best and indicate your choice on the answer sheet provided.
- The periodic table is provided for reference on page 2 of this examination paper.
- The maximum mark for this examination paper is **[30 marks]**.

The Periodic Table

	1	2	3	4	5	6	7	8	9	10	11	12	13	14	15	16	17	18	
1	1 H 1.01	Atòmic number																	
2	3 Li 6.94	4 Be 9.01	Element																
3	11 Na 22.99	12 Mg 24.31	Relative atomic mass																
4	19 K 39.10	20 Ca 40.08	21 Sc 44.96	22 Ti 47.87	23 V 50.94	24 Cr 52.00	25 Mn 54.94	26 Fe 55.85	27 Co 58.93	28 Ni 58.69	29 Cu 63.55	30 Zn 65.38	31 Ga 69.72	32 Ge 72.63	33 As 74.92	34 Se 78.96	35 Br 79.90	36 Kr 83.90	
5	37 Rb 85.47	38 Sr 87.62	39 Y 88.91	40 Zr 91.22	41 Nb 92.91	42 Mo 95.96	43 Tc (98)	44 Ru 101.07	45 Rh 102.91	46 Pd 106.42	47 Ag 107.87	48 Cd 112.41	49 In 114.82	50 Sn 118.71	51 Sb 121.76	52 Te 127.60	53 I 126.90	54 Xe 131.29	
6	55 Cs 132.91	56 Ba 137.33	57 † La 138.91	72 Hf 178.49	73 Ta 180.95	74 W 183.84	75 Re 186.21	76 Os 190.23	77 Ir 192.22	78 Pt 195.08	79 Au 196.97	80 Hg 200.59	81 Tl 204.38	82 Pb 207.2	83 Bi 208.98	84 Po (209)	85 At (210)	86 Rn (222)	
7	87 Fr (223)	88 Ra (226)	89 ‡ Ac (227)	104 Rf (267)	105 Db (268)	106 Sg (269)	107 Bh (270)	108 Hs (269)	109 Mt (278)	110 Ds (281)	111 Rg (281)	112 Cn (285)	113 Unt (286)	114 Uug (289)	115 Uup (288)	116 Uuh (293)	117 Uus (294)	118 Uuo (294)	
	†																		
	58 Ce 140.12	59 Pr 140.91	60 Nd 144.24	61 Pm (145)	62 Sm 150.36	63 Eu 151.96	64 Gd 157.25	65 Tb 158.93	66 Dy 162.50	67 Ho 164.93	68 Er 167.26	69 Tm 168.93	70 Yb 173.05	71 Lu 174.97					
	‡																		
	90 Th 232.04	91 Pa 231.04	92 U 238.03	93 Np (237)	94 Pu (244)	95 Am (243)	96 Cm (247)	97 Bk (247)	98 Cf (251)	99 Es (252)	100 Fm (257)	101 Md (258)	102 No (259)	103 Lr (262)					

1. What is the number of hydrogen atoms in 2.00 moles of $\text{Ca}(\text{HCO}_3)_2$?

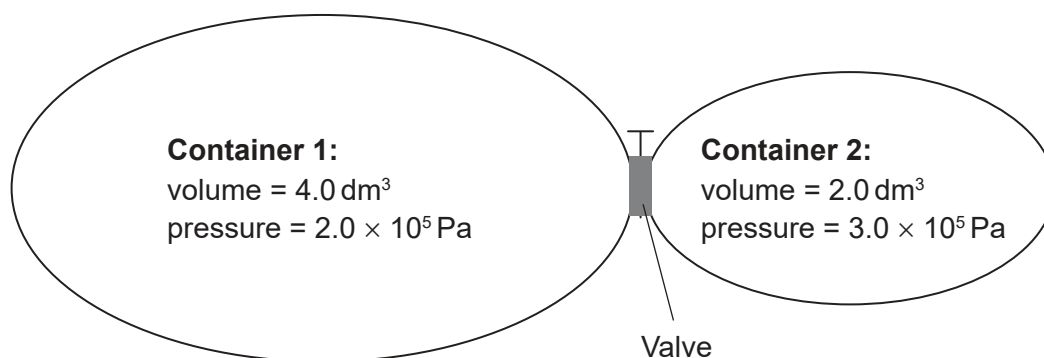
Avogadro's constant, L or N_A : $6.02 \times 10^{23} \text{ mol}^{-1}$

- A. 2.00
- B. 4.00
- C. 1.20×10^{24}
- D. 2.41×10^{24}
2. Which statement describes all homogeneous mixtures?
- A. Any sample has the same ratio of the components.
- B. The components are covalently bonded together.
- C. The components cannot be easily separated.
- D. The mixture needs a specific ratio of components to form.
3. Which combination is correct?

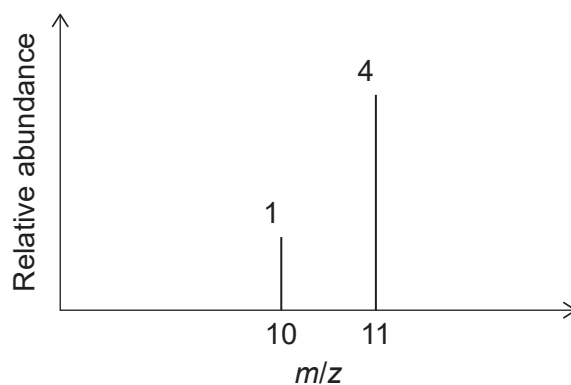
	Structural formula	Empirical formula	IHD
A.	C_6H_{12}	C_2H_4	1
B.	C_6H_{14}	C_3H_7	0
C.	C_8H_8	CH	3
D.	C_8H_{10}	C_4H_6	4

Turn over

4. The two containers shown are connected by a valve. What is the total pressure after the valve is opened and the two gas samples are allowed to mix at constant temperature?



- A. $1.5 \times 10^5 \text{ Pa}$
 B. $2.3 \times 10^5 \text{ Pa}$
 C. $2.5 \times 10^5 \text{ Pa}$
 D. $5.0 \times 10^5 \text{ Pa}$
5. Consider the mass spectrum of an element:



What is the relative atomic mass of this element?

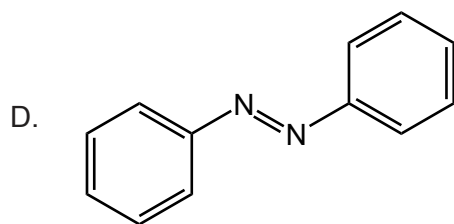
- A. 10.2
 B. 10.5
 C. 10.8
 D. 10.9

6. How many p-orbitals are occupied in a phosphorus atom?
- A. 2
B. 3
C. 5
D. 6
7. Which element has the highest metallic character in Group 14?
- A. C
B. Si
C. Ge
D. Sn
8. Which combination describes the acid–base nature of aluminium and phosphorus oxides?

	Aluminium	Phosphorus
A.	Amphoteric oxide	Acidic oxide
B.	Basic oxide	Amphoteric oxide
C.	Acidic oxide	Amphoteric oxide
D.	Amphoteric oxide	Basic oxide

9. Which molecule has the **weakest** nitrogen to nitrogen bond?

- A. N_2
B. N_2H_2
C. N_2H_4



Turn over

10. Which combination would create the strongest ionic bond?

	Ionic radius	Charges on ions
A.	large	high
B.	large	low
C.	small	high
D.	small	low

11. Which compound contains both ionic and covalent bonds?

- A. CH_3COONa
- B. CH_3COOH
- C. K_2O
- D. CaCl_2

12. The following compounds have similar relative molecular masses. What is the order of increasing boiling point?

- A. $\text{CH}_3\text{CH}_2\text{CH}_2\text{OH} < \text{CH}_3\text{CH}_2\text{CHO} < \text{CH}_3\text{COOH}$
- B. $\text{CH}_3\text{CH}_2\text{CHO} < \text{CH}_3\text{CH}_2\text{CH}_2\text{OH} < \text{CH}_3\text{COOH}$
- C. $\text{CH}_3\text{CH}_2\text{CHO} < \text{CH}_3\text{COOH} < \text{CH}_3\text{CH}_2\text{CH}_2\text{OH}$
- D. $\text{CH}_3\text{COOH} < \text{CH}_3\text{CH}_2\text{CHO} < \text{CH}_3\text{CH}_2\text{CH}_2\text{OH}$

13. Which alcohol is **least** soluble in water?

- A. CH_3OH
- B. $\text{CH}_3\text{CH}_2\text{OH}$
- C. $\text{CH}_3\text{CH}_2\text{CH}_2\text{OH}$
- D. $\text{CH}_3\text{CH}_2\text{CH}_2\text{CH}_2\text{OH}$

14. Which combustion reaction releases the **least** energy per mole of C_3H_8 ?

Approximate bond enthalpy / kJ mol^{-1}

O=O 500

C=O 800

C≡O 1000

- A. $C_3H_8(g) + 5O_2(g) \rightarrow 3CO_2(g) + 4H_2O(g)$
- B. $C_3H_8(g) + \frac{9}{2}O_2(g) \rightarrow 2CO_2(g) + CO(g) + 4H_2O(g)$
- C. $C_3H_8(g) + 4O_2(g) \rightarrow CO_2(g) + 2CO(g) + 4H_2O(g)$
- D. $C_3H_8(g) + \frac{7}{2}O_2(g) \rightarrow 3CO(g) + 4H_2O(g)$

15. Which equation represents the standard enthalpy of formation of lithium oxide?

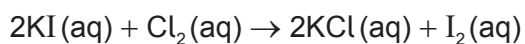
- A. $4Li(s) + O_2(g) \rightarrow 2Li_2O(s)$
- B. $2Li(s) + \frac{1}{2}O_2(g) \rightarrow Li_2O(s)$
- C. $Li(s) + \frac{1}{4}O_2(g) \rightarrow \frac{1}{2}Li_2O(s)$
- D. $Li(g) + \frac{1}{4}O_2(g) \rightarrow \frac{1}{2}Li_2O(g)$

16. Which statement describes an endothermic reaction?

- A. The bonds broken are stronger than the bonds formed.
- B. The enthalpy of the reactants is higher than the enthalpy of the products.
- C. The temperature of the surroundings increases.
- D. The products are more stable than the reactants.

Turn over

17. Which instrument would best monitor the rate of this reaction?



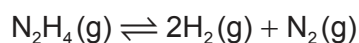
- A. Balance
- B. Colorimeter
- C. Volumetric flask
- D. Gas syringe

18. Which combination has the greatest rate of reaction at room temperature?

	Zinc	$\text{CuSO}_4(\text{aq})$
A.	1.00 g Zn powder	50.0 cm ³ of 0.200 mol dm ⁻³ $\text{CuSO}_4(\text{aq})$
B.	1.00 g Zn powder	100.0 cm ³ of 0.100 mol dm ⁻³ $\text{CuSO}_4(\text{aq})$
C.	1.00 g Zn strip	50.0 cm ³ of 0.200 mol dm ⁻³ $\text{CuSO}_4(\text{aq})$
D.	1.00 g Zn strip	100.0 cm ³ of 0.100 mol dm ⁻³ $\text{CuSO}_4(\text{aq})$

19. The equilibrium $2\text{H}_2(\text{g}) + \text{N}_2(\text{g}) \rightleftharpoons \text{N}_2\text{H}_4(\text{g})$ has an equilibrium constant, K , at 150°C.

What is the equilibrium constant at 150°C, for the reverse reaction?



- A. K
- B. K^{-1}
- C. $-K$
- D. $2K$

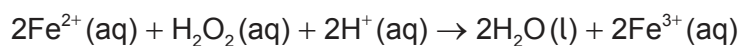
20. Which ions are present in an aqueous solution of Na_2CO_3 ?

- I. HCO_3^-
 - II. OH^-
 - III. CO_3^{2-}
- A. I and II only
 - B. I and III only
 - C. II and III only
 - D. I, II and III

21. What is the conjugate acid of HS^- ?

- A. H_2S
- B. S^{2-}
- C. H_2SO_3
- D. H_2SO_4

22. What is the change in the oxidation state of oxygen?



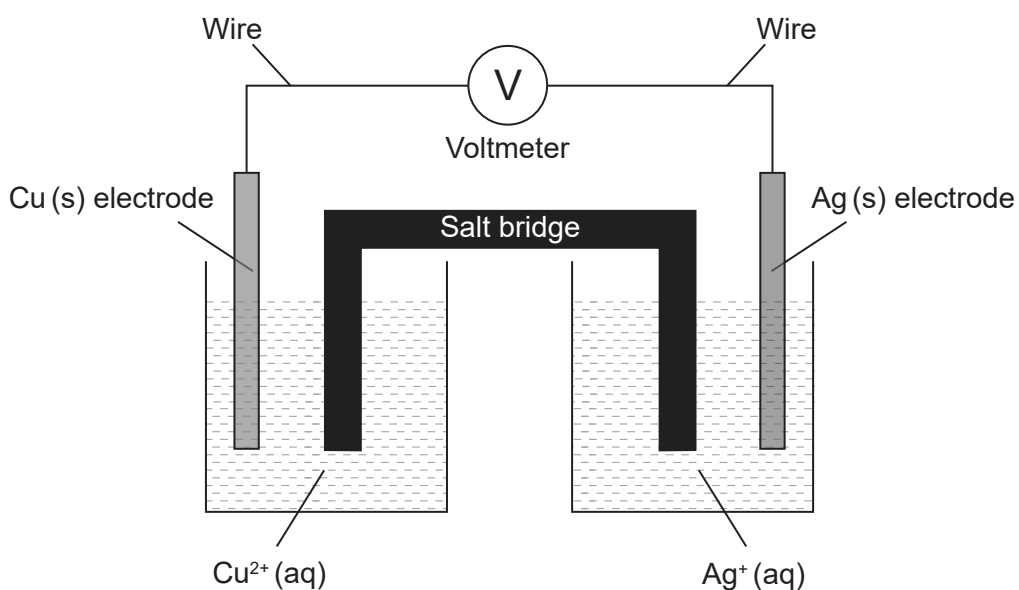
- A. +1
- B. 0
- C. -1
- D. -2

23. Which statement is correct about the electrolysis of molten lead(II) bromide, PbBr_2 ?

- A. Br^- ions accept electrons at the cathode (negative electrode).
- B. Pb^{2+} ions accept electrons at the anode (positive electrode).
- C. Br^- ions lose electrons at the anode (positive electrode).
- D. Pb^{2+} ions lose electrons at the cathode (negative electrode).

Turn over

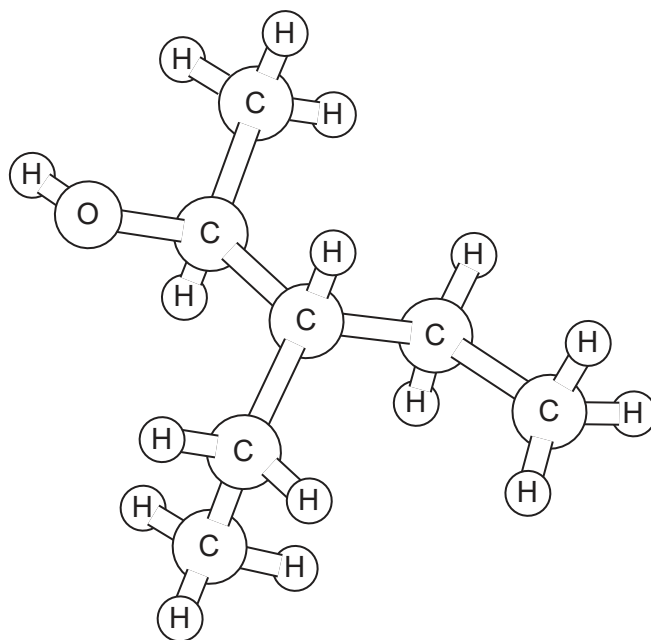
24. Consider this voltaic cell, where Cu is a more reactive metal than Ag:



Which combination describes the movement of charge in this cell?

	Flow of electrons in wire	Flow of negative ions in salt bridge
A.	Ag(s) to Cu(s)	Toward Ag ⁺ (aq)
B.	Cu(s) to Ag(s)	Toward Ag ⁺ (aq)
C.	Ag(s) to Cu(s)	Toward Cu ²⁺ (aq)
D.	Cu(s) to Ag(s)	Toward Cu ²⁺ (aq)

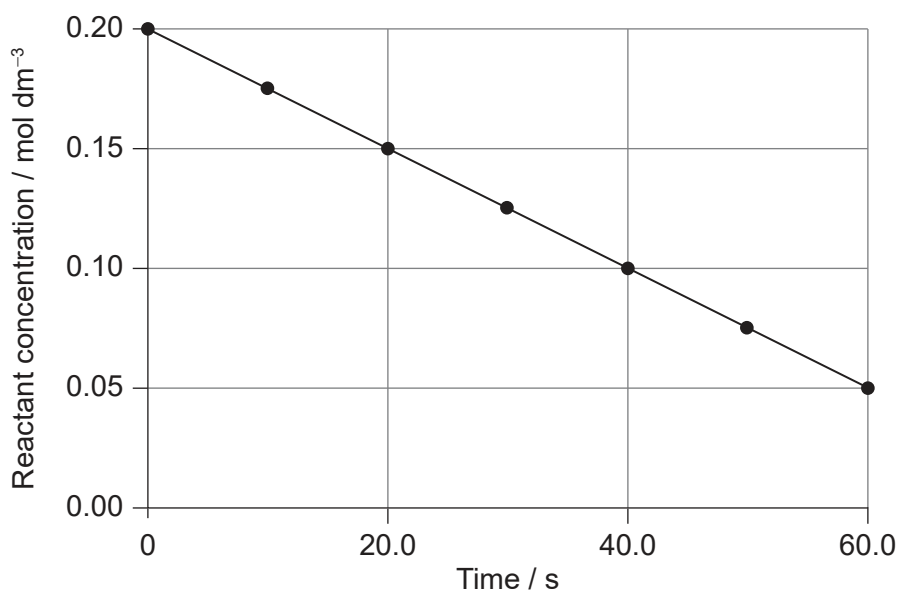
25. What is the name of this substance using IUPAC rules?



- A. 2-ethyl-1-methylbutan-1-ol
 - B. 1-methyl-2-ethylbutan-1-ol
 - C. 3-ethylpentan-2-ol
 - D. 3-ethylpentan-4-ol
26. Which pair of compounds are structural isomers?
- A. Propane and propene
 - B. Propanal and propanone
 - C. Propan-1-ol and propanal
 - D. Propyl propanoate and propanoic acid
27. What is the general formula of alkynes?
- A. C_nH_{2n+2}
 - B. C_nH_{2n}
 - C. C_nH_{2n-2}
 - D. C_nH_n

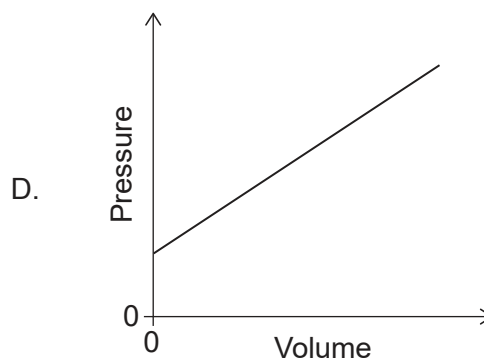
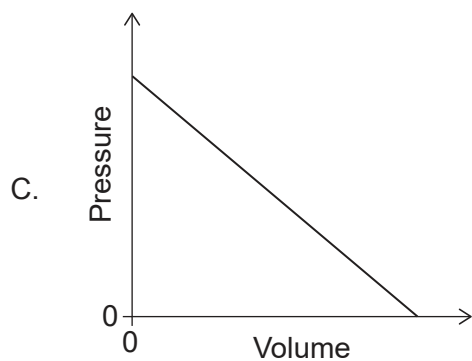
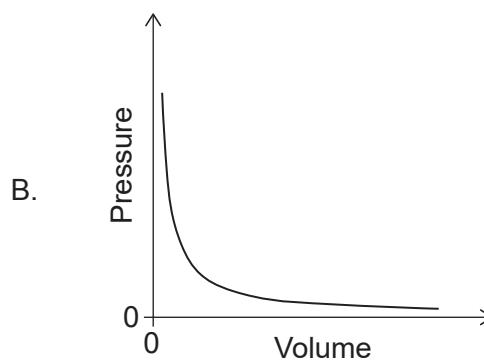
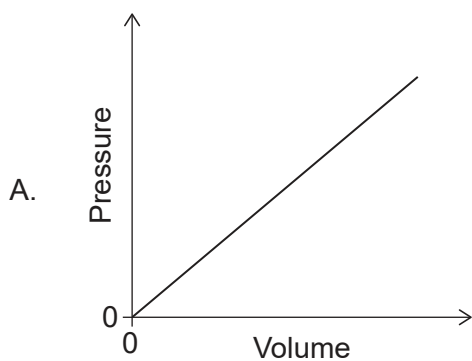
Turn over

28. What is the slope of the graph?

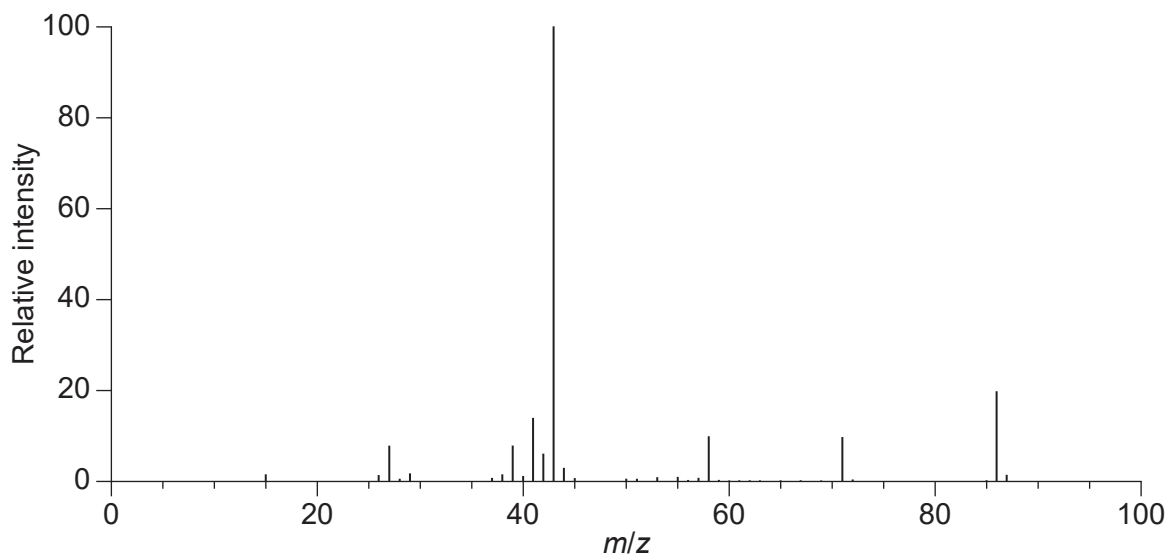


- A. $-0.0025 \text{ mol dm}^{-3} \text{ s}^{-1}$
- B. $-0.0025 \text{ mol dm}^{-3} \text{ s}$
- C. $-0.0033 \text{ mol dm}^{-3} \text{ s}^{-1}$
- D. $-0.0033 \text{ mol dm}^{-3} \text{ s}$

29. Which graph shows the relationship between the pressure and volume of a sample of gas at constant temperature?



30. What can be deduced from the mass spectrum of $\text{CH}_3\text{COCH}_2\text{CH}_2\text{CH}_3$?



- A. The molar mass is 43 g mol^{-1} .
- B. The atoms have many isotopes.
- C. The most likely bond to break is C–C between carbons 2 and 3.
- D. The signal with the largest mass is due to the oxidation of the ketone in the spectrometer.

References:

14. Chemistry: Atoms First 2e, <https://openstax.org/books/chemistry-atoms-first-2e/pages/9-4-strengths-of-ionic-and-covalent-bonds> © 1999–2021, Rice University. Except where otherwise noted, textbooks on this site are licensed under a Creative Commons Attribution 4.0 International License. (CC BY 4.0) <https://creativecommons.org/licenses/by/4.0/>.
30. NIST Mass Spectrometry Data Center Collection © 2021 copyright by the U.S. Secretary of Commerce on behalf of the United States of America. All rights reserved. 2-Pentanone Mass Spectrum, MS Number 291264. [graph] Available at: <https://webbook.nist.gov/cgi/cbook.cgi?ID=C107879&Units=SI&Mask=200#Mass-Spec2-pentanone> [Accessed 4 May 2020]. Source adapted.

All other texts, graphics and illustrations © International Baccalaureate Organization 2021